


# Maths challenges

These are optional challenges to work on :)  
The answers will be posted on Friday.

Monday

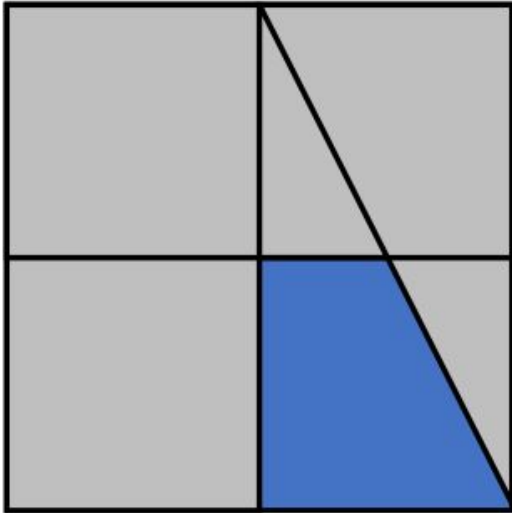
Explain



*Which fractions  
do you see?*

Tuesday

Explain

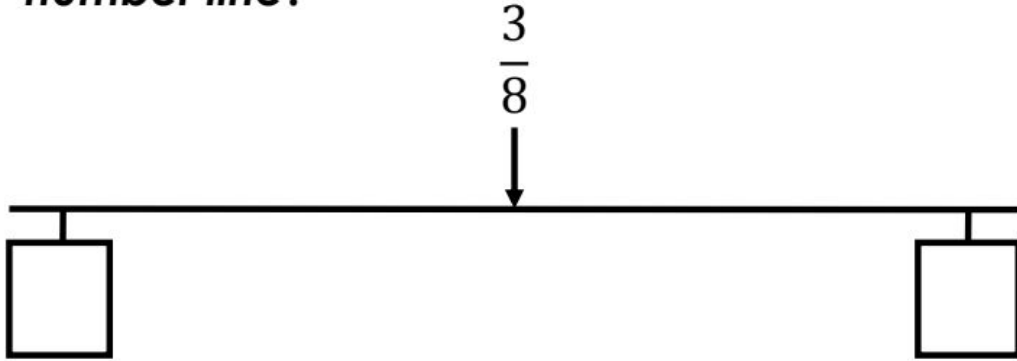


*What fraction of the square is blue?*

# Wednesday

## Different ways

***Which fractions could be at either end of the number line?***



Thursday

How many ways?

*Complete the fractions using three of the number cards.*

$\frac{\square}{8} > \frac{\square}{\square}$

3 4 5 6 5