

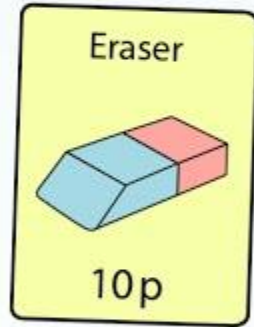
# Maths

14. Find how many coins are needed to make a given value

# Find how many coins are needed to make a given value




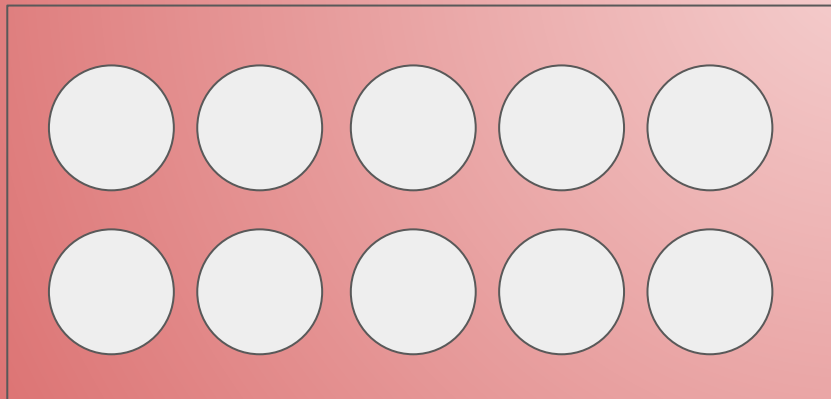

## KS1 Multiplication Lesson 14



For this lesson you will need your your 2p coins. You make also want your 2 tokens.

You may also want to make a 'tens frame' for this lesson.

# Find how many coins are needed to make a given value



How many coins would you need to buy the pencil? Try it with 1p and 2p coins.

Which do you think will need fewer coins? Prove it using your tens frame

Find how many coins are needed to make a given value

[https://docs.google.com/forms/d/e/1FAIpQLScbBNY2KTRuCLDmOvjGaF8-MTVeTCqYFdAo5hL0\\_hM0qECyGQ/viewform?usp=sf\\_link](https://docs.google.com/forms/d/e/1FAIpQLScbBNY2KTRuCLDmOvjGaF8-MTVeTCqYFdAo5hL0_hM0qECyGQ/viewform?usp=sf_link)

Click on the link and complete the questions for lesson 14