

Date:

L12 LO: to order fractions

How did you get on with these activities? Write the letters under the pictures, like you usually do in class- show your adults how you do this.




How I did:

Know:

Answers:

a) Shade the bar models to represent the fractions.



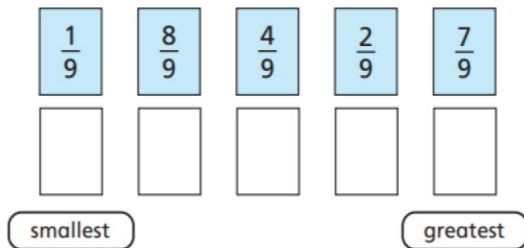
b) What do you notice?

Try this on a piece of paper.

Understand:

Write them below:

Write the fractions in order, starting with the smallest.



Apply: Give it a go, but don't worry if it's too tricky

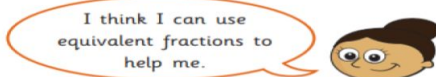
Who do you agree with?

Tommy and Dora are ordering fractions.



Tommy

I cannot order these fractions because the numerators and denominators are different.



Dora

I think I can use equivalent fractions to help me.

Who do you agree with? _____

Write your answer below:

