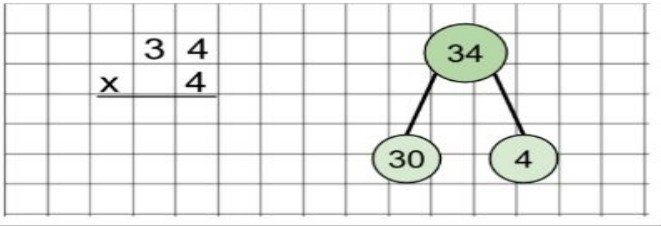
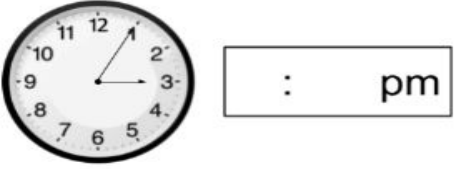
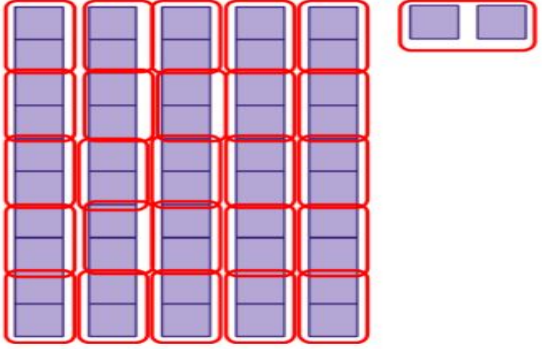
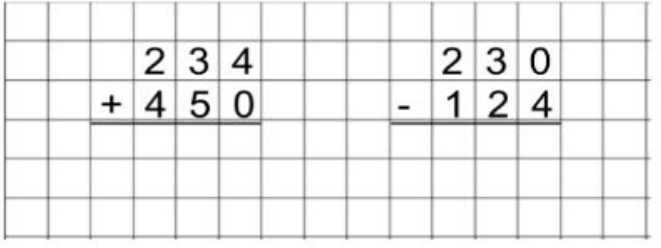


Year 3 Fluency for Week 1. This will be marked in Week 2 (2/4/20)

<p>Questions - do not try and write on these</p>	<p>Answers- please write them below:</p>
<p>Multiply using the formal method.</p> 	<p>Answer:</p>
<p>Write the time shown on the clock.</p> 	<p>Answer:</p>
<p>Divide by regrouping.</p> $52 \div 2 = \boxed{}$ 	<p>Answer:</p>
<p>Fill in the missing information.</p> <p>James went swimming from 12:10pm to 12:45pm.</p> <p>How long did he swim for? <input type="text"/> minutes</p>	<p>Answer:</p>
<p>Use the column method to solve these calculations.</p> 	<p>Answer 1:</p> <p>Answer 2:</p>