

Date: 21st April 2020

L5 LO: fractions on a number line

How did you get on with these activities? Write the letters under the pictures, like you usually do in class- show your adults how you do this.



How I did:

Know:

Answers:


Split this number line into **eighths**.
Can you label them on the number line?



Challenge:

Can you continue the number line up to 2?

How would you label the fractions larger than one?

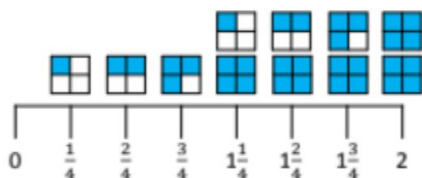


You can use a piece of paper to do this.

Understand:

Do you agree?

Eva has drawn a number line.



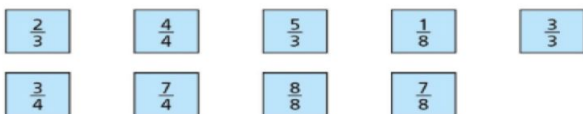
Mike says it is incorrect.

Do you agree with Mike?

Explain why.

Apply: Give it a go, but don't worry if it's too tricky

Less than one whole



Equal to one whole

Less than one whole	Equal to one whole	More than one whole

More than one whole

