



Year 2

Home Learning

Thursday 2nd April 2020



Whyteleafe School



English

<https://www.literacyshed.com/the-retro-shed.html>

Scroll down to the thundercats video.



Our learning this week is based on the Thundercats introduction.

Write your story involving Lion-O and Mumm-Ra that you planned yesterday. It will need a beginning middle and end. Check through your work afterwards to make sure your full stops and capital letter are correct.

SPaG

Tick the sentence with the correct punctuation.

Which sentence is correctly punctuated?

Tick **one**.

We saw sheep cows, and birds on our walk.

We saw sheep, cows and birds on our walk.

We saw sheep cows and birds, on our walk.

We saw, sheep cows and birds on our walk.

SPaG

Tick the sentence with the correct punctuation.

Remember
your commas
in a list to
separate
items.

Tick **one**.

We saw sheep cows, and birds on our walk.

We saw sheep, cows and birds on our walk.

We saw sheep cows and birds, on our walk.

We saw, sheep cows and birds on our walk.

Weekly Spelling rule

Rule: If the word ends in a y, drop the y before adding ier.

~~crazy~~

lazy

angry

silly

tricky

sticky

1. The weather on Monday was crazier than the weather on Tuesday.

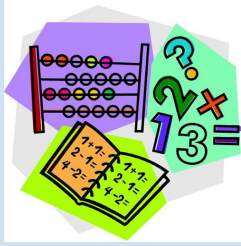
Write your own sentences using these root words but as comparative adjectives that end in er. One has been done for you.

By the end of Year 2 all children should know how to spell these.

Year 2 Common Exception Words

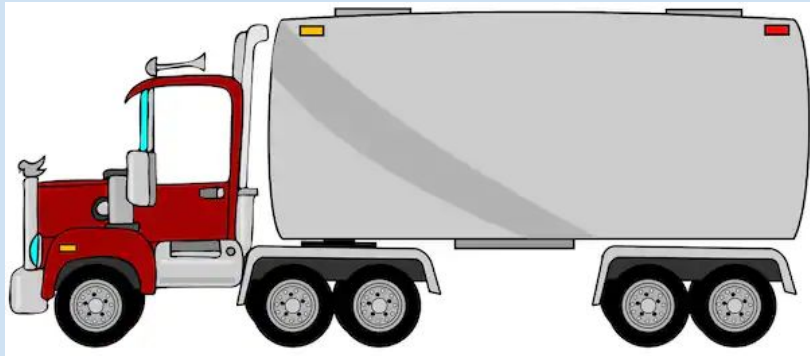
after	child	every	half	move	plant	whole
again	children	everybody	hold	Mr	poor	who
any	Christmas	eye	hour	Mrs	pretty	wild
bath	class	fast	improve	old	prove	would
beautiful	climb	father	kind	only	should	
because	clothes	find	last	parents	steak	
behind	could	floor	many	pass	sugar	
both	cold	gold	mind	past	sure	
break	door	grass	money	path	told	
busy	even	great	most	people	water	

Maths -

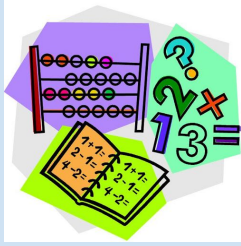


1. In a toy box there are lorries with 10 wheels, bikes with 2 wheels and trolleys with 5 wheels. If I can see 45 wheels, what could be in the toy box? Is there more than one answer?

Can you use your multiplication facts to help you?



Maths -



For example there could be:

3 trucks ($3 \times 10 = 30$)

5 bikes ($5 \times 2 = 10$)

1 trolley ($1 \times 5 = 5$)

Total = 45 wheels.



Daily Reading

There is still an expectation for daily reading to take place at home. Please continue to note this in the school/home contact book.

If you have finished your books from home there are e-books available.

Oxford Reading <https://www.oxfordowl.co.uk/>

2A Username: year2a!

Password: year2

2R Username: year2r!

Password: year2r!



Collins Connect <https://connect.collins.co.uk/school/defaultlogin.aspx>

DT



1. Make the sandwich that last week you designed for a birthday party.
2. What was good about it?
3. What could you improved for next time?

